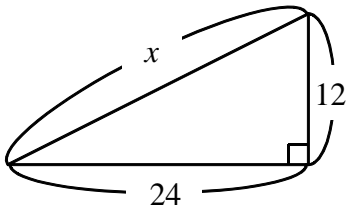


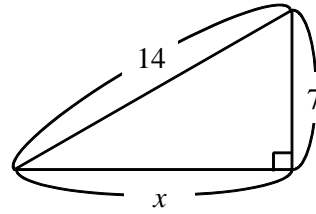
【演習】②三平方の定理の使い方の工夫

1 次の図で、 x の値を求めよ。

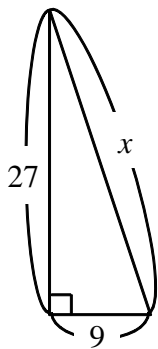
(1)



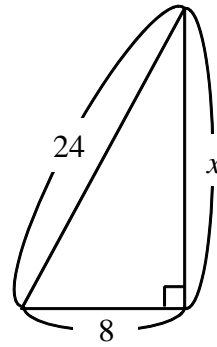
(2)



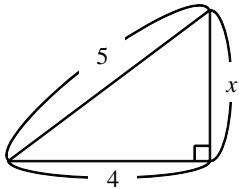
(3)



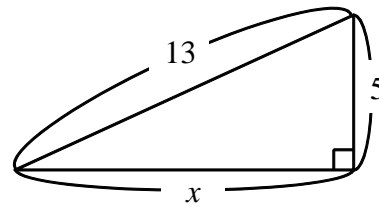
(4)



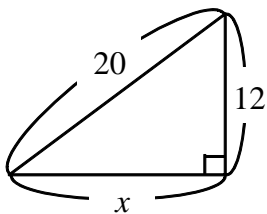
(5)



(6)



(7)



(8)

