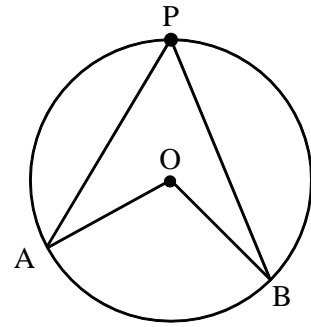


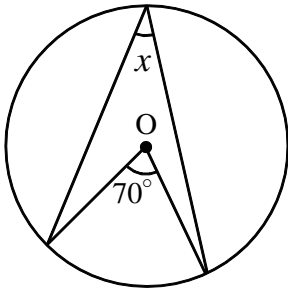
【演習】①円周角と中心角

1 右の図で、 $\angle AOB = 2\angle APB$  が成り立つことを証明せよ。

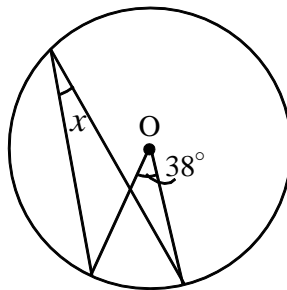


2 下の図で、 $\angle x$  の大きさをそれぞれ求めよ。

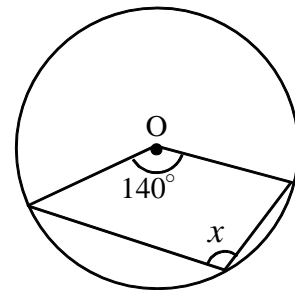
(1)



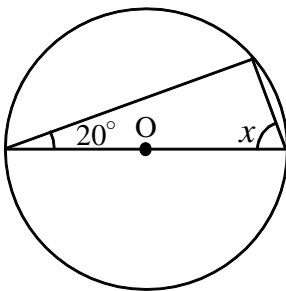
(2)



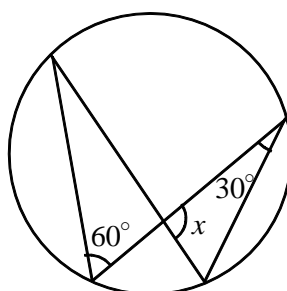
(3)



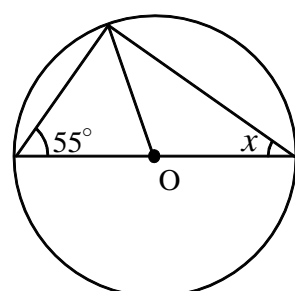
(4)



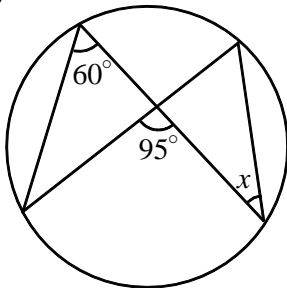
(5)



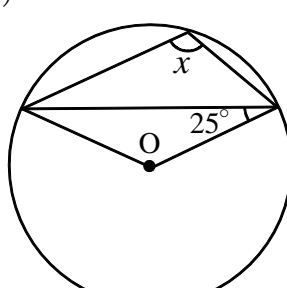
(6)



(7)



(8)



(9)

